

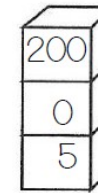
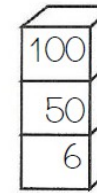

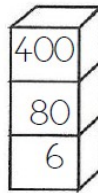
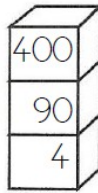
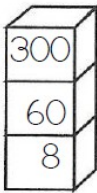
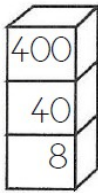
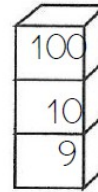
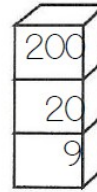
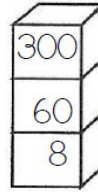
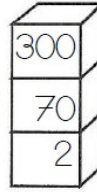
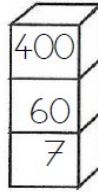
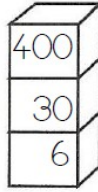
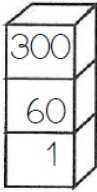
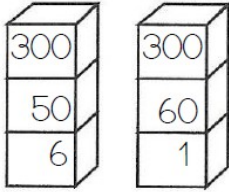
Prénom : _____

Date: _____


Nombres et quantités : de 0 à 499



1 Colorie la pile qui représente le plus petit nombre:



2 Entoure les pièces et billets qu'il faut choisir pour avoir 314€ :



Pour avoir 314€, il faut :

.....	billets de 100 €
.....	billets de 10 €
.....	pièces de 1 €

3 Relie les nombres à leur place sur la droite graduée :

449

472

481

479

485

450

460

470

480

490

4 Complète :

